











Equivalent Fractions

These fractions are equivalent. The rectangles are the same. The amount shaded is equivalent.



Write the fraction of each shape that is shaded and draw a line to match equivalent fraction.

	-	-	
	-	-	
	-	-	
	-	-	
	-	-	

Equivalent Fractions - Answers

These fractions are equivalent. The rectangles are the same. The amount shaded is equivalent.



Write the fraction of each shape that is shaded and draw a line to match equivalent fraction.

